

Factors

Control Marker
1

3rd Number


4th Number

List all the factors
of this number




Work it out

Answers




Factors

Control Marker
2



3rd Number




4th Number

List all the factors
of this number




Work it out

Answers




Factors

Control Marker
3



1st Number




2nd Number

List all the factors
of this number




Work it out

Answers




Factors

Control Marker
4



2nd Number



3rd Number

List all the factors
of this number




Work it out

Answers




Factors

Control Marker
5



1st Number




2nd Number

List all the factors
of this number




Work it out

Answers




Factors

Control Marker
6



2nd Number




3rd Number

List all the factors
of this number




Work it out

Answers




Factors

Control Marker
7



3rd Number




4th Number

List all the factors
of this number




Work it out

Answers




Factors

Control Marker
8



3rd Number



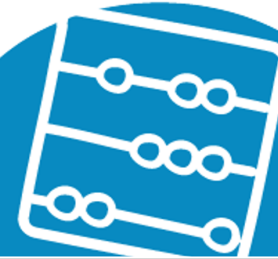
4th Number

List all the factors
of this number




Work it out

Answers




Factors

Control Marker
9



2nd Number



3rd Number

List all the factors
of this number




Work it out

Answers




Factors

Control Marker
10



3rd Number



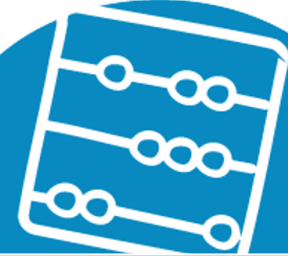
4th Number

List all the factors
of this number




Work it out

Answers




Factors

Control Marker
11



3rd Number




4th Number

List all the factors
of this number




Work it out

Answers




Factors

Control Marker
12



2nd Number



3rd Number

List all the factors
of this number




Work it out

Answers




Factors

Control Marker
13



3rd Number




4th Number

List all the factors
of this number




Work it out

Answers




Factors

Control Marker
14



3rd Number



4th Number

List all the factors
of this number




Work it out

Answers




Factors

Control Marker
15



3rd Number



4th Number

List all the factors
of this number



Work it out

Answers

