



9 More, 9 Less

**Control
Marker
1**



3rd Number



4th Number

=



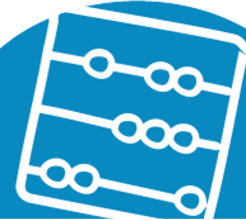
Work it out



What is 9 more?




What is 9 less?




9 More, 9 Less

**Control
Marker
2**



3rd Number



4th Number

=



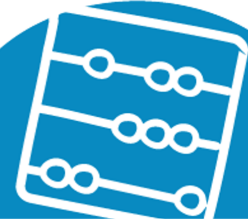
Work it out



What is 9 more?




What is 9 less?




9 More, 9 Less

**Control
Marker**
3



3rd Number



4th Number

=



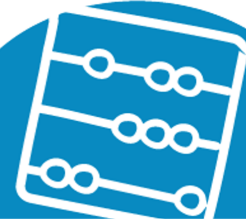
Work it out



What is 9 more?




What is 9 less?




9 More, 9 Less

**Control
Marker**
4



3rd Number



4th Number

=



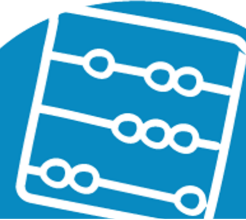
Work it out



What is 9 more?




What is 9 less?




9 More, 9 Less

**Control
Marker**
5



3rd Number



4th Number

=



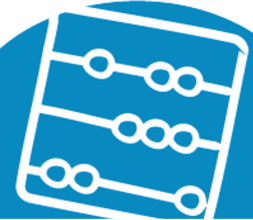
Work it out



What is 9 more?




What is 9 less?




9 More, 9 Less

**Control
Marker**
6



3rd Number



4th Number

=



Work it out



What is 9 more?




What is 9 less?




9 More, 9 Less

**Control
Marker**
7



3rd Number



4th Number

=



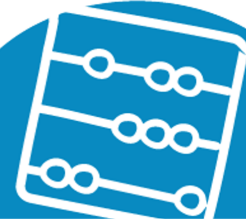
Work it out



What is 9 more?




What is 9 less?




9 More, 9 Less

**Control
Marker**
8



3rd Number



4th Number

=



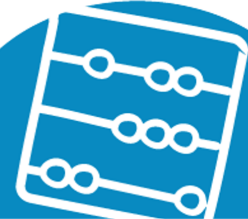
Work it out



What is 9 more?




What is 9 less?




9 More, 9 Less

**Control
Marker**
9



1st Number



2nd Number

=



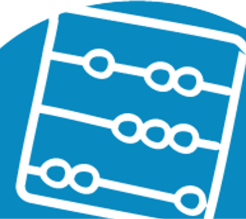
Work it out



What is 9 more?




What is 9 less?




9 More, 9 Less

**Control
Marker
10**



3rd Number



4th Number

=



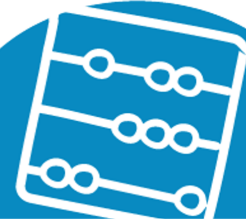
Work it out



What is 9 more?




What is 9 less?




9 More, 9 Less

**Control
Marker
11**




3rd Number



4th Number

=



Work it out



What is 9 more?




What is 9 less?




9 More, 9 Less

**Control
Marker
12**



3rd Number



4th Number

=



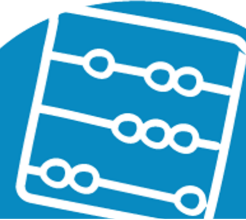
Work it out



What is 9 more?




What is 9 less?




9 More, 9 Less

**Control
Marker
13**



3rd Number



4th Number

=



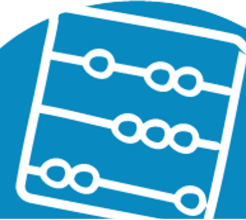
Work it out



What is 9 more?




What is 9 less?




9 More, 9 Less

**Control
Marker**
14



3rd Number



4th Number

=



Work it out



What is 9 more?




What is 9 less?




9 More, 9 Less

**Control
Marker**
15



3rd Number



4th Number

=



Work it out



What is 9 more?



What is 9 less?

