

Addition of 3 Numbers

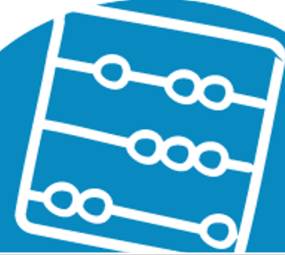
**Control
Marker
1**

$$\square + \square + \square = \square$$

2nd Number 3rd Number 4th Number



Work it out



Addition of 3 Numbers

**Control
Marker
2**

$$\square + \square + \square = \square$$

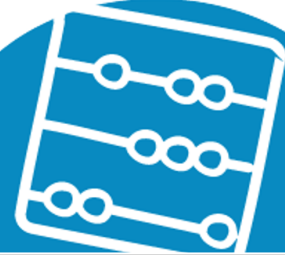
2nd Number

3rd Number

4th Number



Work it out



Addition of 3 Numbers

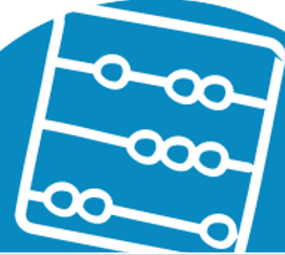
**Control
Marker**
3

$$\square + \square + \square = \square$$

2nd Number 3rd Number 4th Number

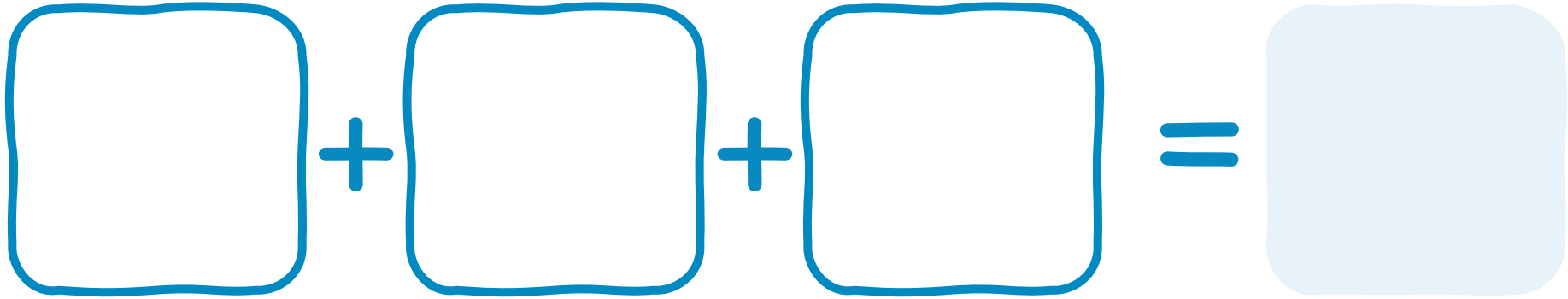


Work it out



Addition of 3 Numbers

**Control
Marker**
4



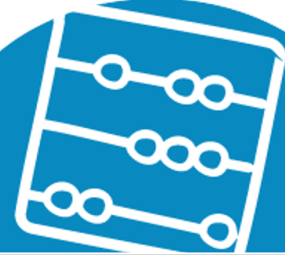
2nd Number

3rd Number

4th Number



Work it out



Addition of 3 Numbers

**Control
Marker
5**

$$\square + \square + \square = \square$$


2nd Number

3rd Number

4th Number

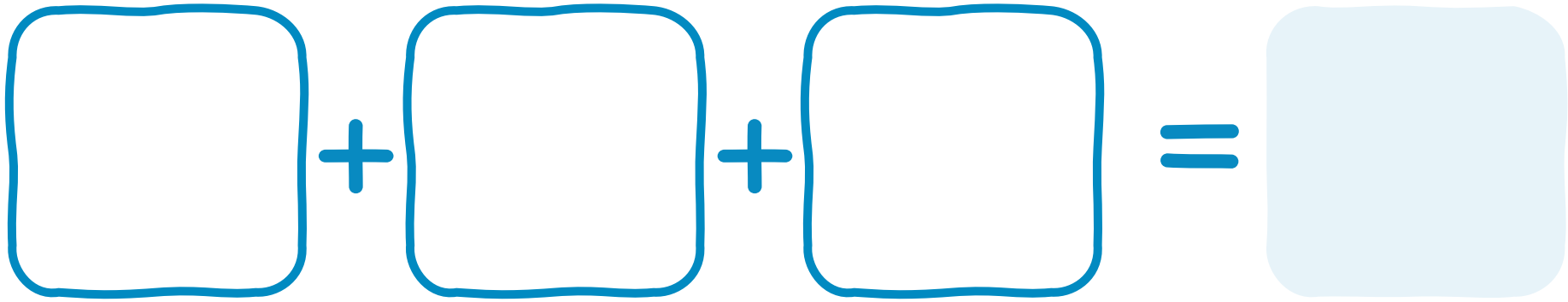


Work it out



Addition of 3 Numbers

**Control
Marker**
6




2nd Number

3rd Number

4th Number

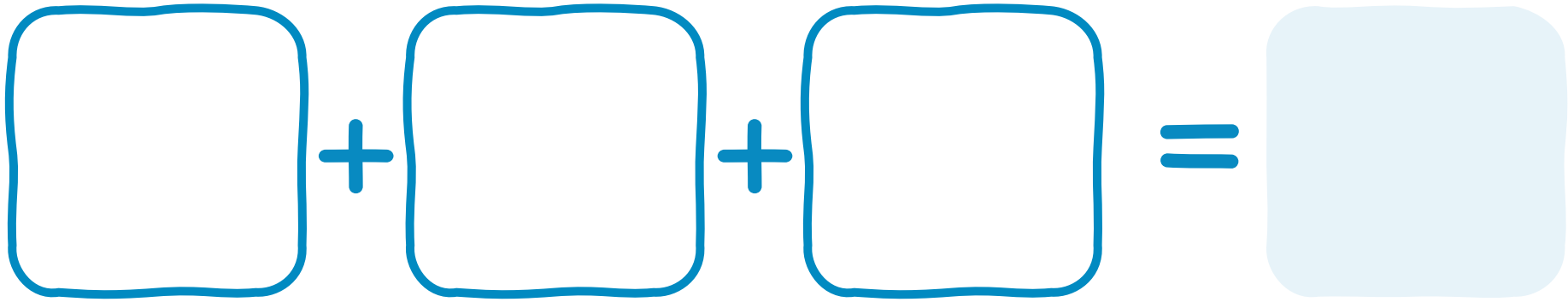


Work it out



Addition of 3 Numbers

**Control
Marker
7**




2nd Number

3rd Number

4th Number



Work it out



Addition of 3 Numbers

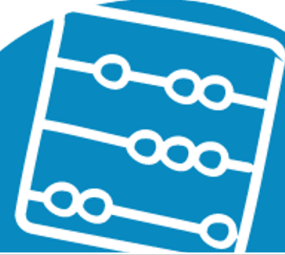
**Control
Marker**
8

$$\square + \square + \square = \square$$

2nd Number 3rd Number 4th Number



Work it out



Addition of 3 Numbers

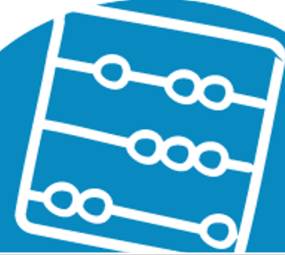
**Control
Marker**
9

$$\square + \square + \square = \square$$

2nd Number 3rd Number 4th Number



Work it out



Addition of 3 Numbers

**Control
Marker
10**

$$\square + \square + \square = \square$$

2nd Number

3rd Number

4th Number



Work it out



Addition of 3 Numbers

**Control
Marker
11**

$$\square + \square + \square = \square$$

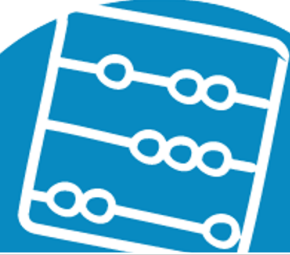
2nd Number

3rd Number

4th Number



Work it out



Addition of 3 Numbers

**Control
Marker
12**

$$\square + \square + \square = \square$$


2nd Number

3rd Number

4th Number



Work it out



Addition of 3 Numbers

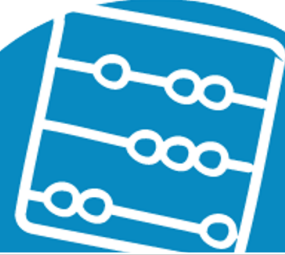
**Control
Marker
13**

$$\square + \square + \square = \square$$

2nd Number 3rd Number 4th Number



Work it out



Addition of 3 Numbers

**Control
Marker
14**

$$\square + \square + \square = \square$$

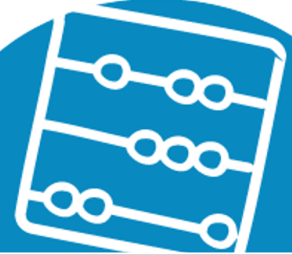
2nd Number

3rd Number

4th Number



Work it out



Addition of 3 Numbers

**Control
Marker
15**

$$\square + \square + \square = \square$$

2nd Number

3rd Number

4th Number



Work it out

