


# Column Addition or Subtraction

**Control  
Marker  
1**



1<sup>st</sup> Number

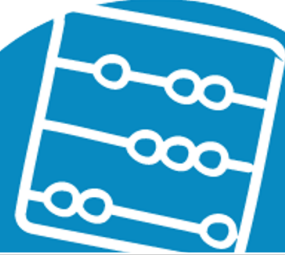
2<sup>nd</sup> Number

3<sup>rd</sup> Number

4<sup>th</sup> Number




**Work it out**



# Column Addition or Subtraction

**Control  
Marker  
2**



1<sup>st</sup> Number


2<sup>nd</sup> Number

3<sup>rd</sup> Number

4<sup>th</sup> Number




**Work it out**



# Column Addition or Subtraction

**Control  
Marker**  
3



1<sup>st</sup> Number


2<sup>nd</sup> Number

3<sup>rd</sup> Number

4<sup>th</sup> Number




**Work it out**



# Column Addition or Subtraction

**Control  
Marker**  
4



1<sup>st</sup> Number

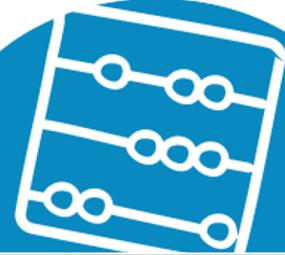
2<sup>nd</sup> Number

3<sup>rd</sup> Number

4<sup>th</sup> Number




**Work it out**



# Column Addition or Subtraction

**Control  
Marker  
5**



1<sup>st</sup> Number

2<sup>nd</sup> Number

3<sup>rd</sup> Number

4<sup>th</sup> Number




**Work it out**



# Column Addition or Subtraction

**Control  
Marker**  
6



1<sup>st</sup> Number

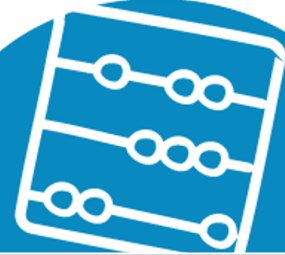
2<sup>nd</sup> Number

3<sup>rd</sup> Number

4<sup>th</sup> Number




**Work it out**



# Column Addition or Subtraction

**Control  
Marker**  
8



1<sup>st</sup> Number


2<sup>nd</sup> Number

3<sup>rd</sup> Number

4<sup>th</sup> Number




**Work it out**



# Column Addition or Subtraction

**Control  
Marker**  
9



1<sup>st</sup> Number

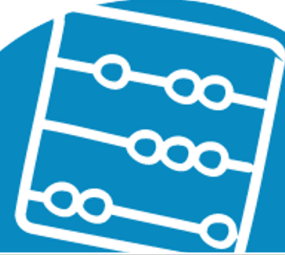
2<sup>nd</sup> Number

3<sup>rd</sup> Number

4<sup>th</sup> Number




**Work it out**





# Column Addition or Subtraction

**Control  
Marker  
10**



1<sup>st</sup> Number


2<sup>nd</sup> Number

3<sup>rd</sup> Number

4<sup>th</sup> Number




**Work it out**



# Column Addition or Subtraction

**Control  
Marker  
11**



1<sup>st</sup> Number


2<sup>nd</sup> Number

3<sup>rd</sup> Number

4<sup>th</sup> Number




**Work it out**



# Column Addition or Subtraction

**Control  
Marker  
12**



1<sup>st</sup> Number


2<sup>nd</sup> Number

3<sup>rd</sup> Number

4<sup>th</sup> Number




**Work it out**



# Column Addition or Subtraction

**Control  
Marker  
13**



1<sup>st</sup> Number

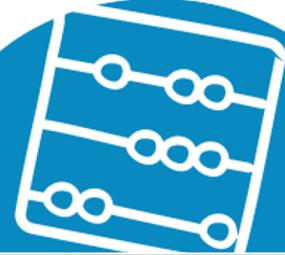
2<sup>nd</sup> Number

3<sup>rd</sup> Number

4<sup>th</sup> Number




**Work it out**



# Column Addition or Subtraction

**Control  
Marker  
14**



1<sup>st</sup> Number

2<sup>nd</sup> Number

3<sup>rd</sup> Number

4<sup>th</sup> Number




**Work it out**



# Column Addition or Subtraction

**Control  
Marker  
15**



1<sup>st</sup> Number


2<sup>nd</sup> Number

3<sup>rd</sup> Number

4<sup>th</sup> Number




**Work it out**



# Column Addition or Subtraction

**Control  
Marker  
1**



1<sup>st</sup> Number


2<sup>nd</sup> Number

3<sup>rd</sup> Number

4<sup>th</sup> Number



**Work it out**



# Column Addition or Subtraction


**Control  
Marker  
1**

$$\boxed{\phantom{000}} \boxed{\phantom{000}} - \boxed{\phantom{000}} \boxed{\phantom{000}} = \boxed{\phantom{000}}$$

3<sup>rd</sup> Number      4<sup>th</sup> Number      1<sup>st</sup> Number      2<sup>nd</sup> Number




**Work it out**





# Column Addition or Subtraction

**Control  
Marker  
2**



1<sup>st</sup> Number


2<sup>nd</sup> Number

3<sup>rd</sup> Number

4<sup>th</sup> Number



**Work it out**



# Column Addition or Subtraction

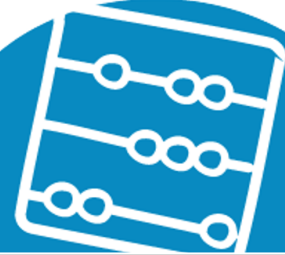
**Control  
Marker**  
3

$$\boxed{\phantom{000}} \boxed{\phantom{000}} - \boxed{\phantom{000}} \boxed{\phantom{000}} = \boxed{\phantom{000}}$$

3<sup>rd</sup> Number      4<sup>th</sup> Number      1<sup>st</sup> Number      2<sup>nd</sup> Number




**Work it out**



# Column Addition or Subtraction

**Control  
Marker**  
4



1<sup>st</sup> Number

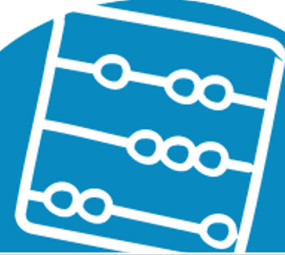
2<sup>nd</sup> Number

3<sup>rd</sup> Number

4<sup>th</sup> Number



**Work it out**



# Column Addition or Subtraction

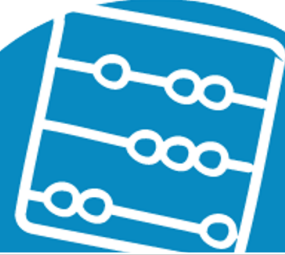
**Control  
Marker  
5**

$$\boxed{\phantom{000}} \boxed{\phantom{000}} - \boxed{\phantom{000}} \boxed{\phantom{000}} = \boxed{\phantom{000}}$$

3<sup>rd</sup> Number      4<sup>th</sup> Number      1<sup>st</sup> Number      2<sup>nd</sup> Number




**Work it out**



# Column Addition or Subtraction

**Control  
Marker**  
6



1<sup>st</sup> Number

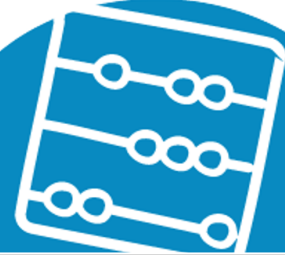
2<sup>nd</sup> Number

3<sup>rd</sup> Number

4<sup>th</sup> Number




**Work it out**



# Column Addition or Subtraction

**Control  
Marker  
7**



1<sup>st</sup> Number

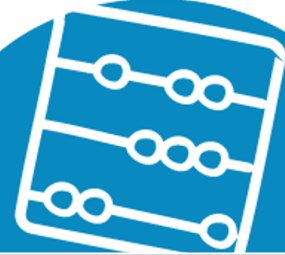
2<sup>nd</sup> Number

3<sup>rd</sup> Number

4<sup>th</sup> Number



**Work it out**



# Column Addition or Subtraction

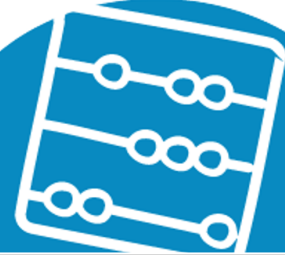
**Control  
Marker**  
8

$$\boxed{\phantom{000}} \boxed{\phantom{000}} - \boxed{\phantom{000}} \boxed{\phantom{000}} = \boxed{\phantom{000}}$$

3<sup>rd</sup> Number      4<sup>th</sup> Number      1<sup>st</sup> Number      2<sup>nd</sup> Number




**Work it out**



# Column Addition or Subtraction

**Control  
Marker**  
9



1<sup>st</sup> Number

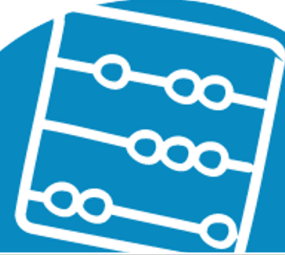
2<sup>nd</sup> Number

3<sup>rd</sup> Number

4<sup>th</sup> Number




**Work it out**





# Column Addition or Subtraction

**Control  
Marker  
10**



1<sup>st</sup> Number


2<sup>nd</sup> Number

3<sup>rd</sup> Number

4<sup>th</sup> Number



**Work it out**



# Column Addition or Subtraction

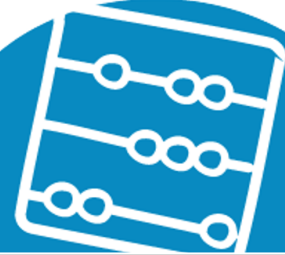
**Control  
Marker  
11**

$$\boxed{\phantom{000}} \boxed{\phantom{000}} - \boxed{\phantom{000}} \boxed{\phantom{000}} = \boxed{\phantom{000}}$$

3<sup>rd</sup> Number      4<sup>th</sup> Number      1<sup>st</sup> Number      2<sup>nd</sup> Number




**Work it out**



# Column Addition or Subtraction

**Control  
Marker  
12**



1<sup>st</sup> Number

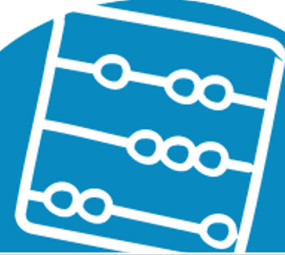
2<sup>nd</sup> Number

3<sup>rd</sup> Number

4<sup>th</sup> Number



**Work it out**



# Column Addition or Subtraction

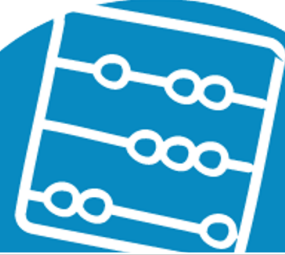
**Control  
Marker  
13**

$$\boxed{\phantom{000}} \boxed{\phantom{000}} - \boxed{\phantom{000}} \boxed{\phantom{000}} = \boxed{\phantom{000}}$$

3<sup>rd</sup> Number      4<sup>th</sup> Number      1<sup>st</sup> Number      2<sup>nd</sup> Number



**Work it out**



# Column Addition or Subtraction

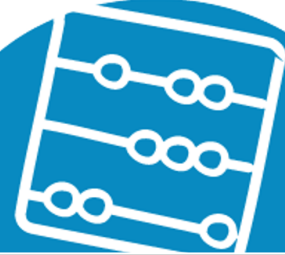
**Control  
Marker  
14**

$$\boxed{\phantom{000}} \boxed{\phantom{000}} - \boxed{\phantom{000}} \boxed{\phantom{000}} = \boxed{\phantom{000}}$$

3<sup>rd</sup> Number      4<sup>th</sup> Number      1<sup>st</sup> Number      2<sup>nd</sup> Number




**Work it out**



# Column Addition or Subtraction

**Control  
Marker  
15**



1<sup>st</sup> Number

2<sup>nd</sup> Number

3<sup>rd</sup> Number

4<sup>th</sup> Number



**Work it out**

