

# Greater Than or Less Than

**Control Marker**  
**1**

1<sup>st</sup> Number

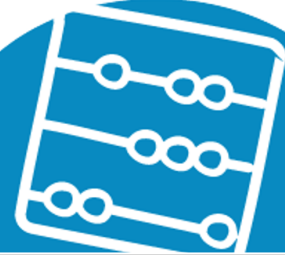
2<sup>nd</sup> Number

3<sup>rd</sup> Number

4<sup>th</sup> Number

**Answer**

Write a number sentence using  $<$  or  $>$  and some of these numbers  
e.g.  $7 > 1$



# Greater Than or Less Than

**Control Marker**  
**2**

1<sup>st</sup> Number

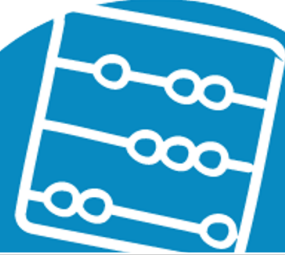
2<sup>nd</sup> Number

3<sup>rd</sup> Number

4<sup>th</sup> Number

**Answer**

Write a number sentence using  $<$  or  $>$  and some of these numbers  
e.g.  $7 > 1$



# Greater Than or Less Than

**Control Marker**  
**3**

1<sup>st</sup> Number

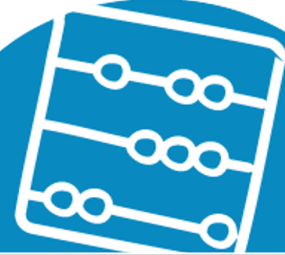
2<sup>nd</sup> Number

3<sup>rd</sup> Number

4<sup>th</sup> Number

**Answer**

Write a number sentence using  $<$  or  $>$  and some of these numbers  
e.g.  $7 > 1$



# Greater Than or Less Than

**Control Marker**  
**4**

1<sup>st</sup> Number

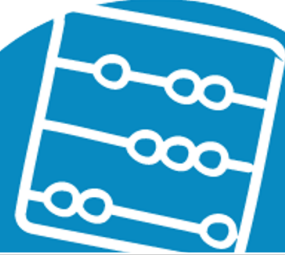
2<sup>nd</sup> Number

3<sup>rd</sup> Number

4<sup>th</sup> Number

**Answer**

Write a number sentence using  $<$  or  $>$  and some of these numbers  
e.g.  $7 > 1$



# Greater Than or Less Than

**Control Marker**  
5

1<sup>st</sup> Number

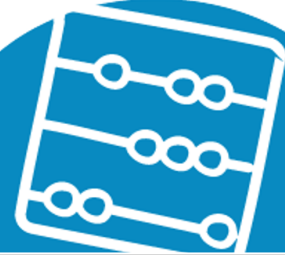
2<sup>nd</sup> Number

3<sup>rd</sup> Number

4<sup>th</sup> Number

**Answer**

Write a number sentence using  $<$  or  $>$  and some of these numbers  
e.g.  $7 > 1$



# Greater Than or Less Than

**Control Marker**  
6

1<sup>st</sup> Number

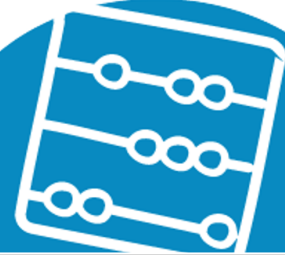
2<sup>nd</sup> Number

3<sup>rd</sup> Number

4<sup>th</sup> Number

**Answer**

Write a number sentence using  $<$  or  $>$  and some of these numbers  
e.g.  $7 > 1$



# Greater Than or Less Than

**Control Marker**  
**7**

1<sup>st</sup> Number

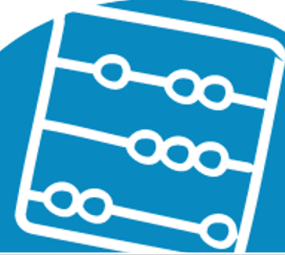
2<sup>nd</sup> Number

3<sup>rd</sup> Number

4<sup>th</sup> Number

**Answer**

Write a number sentence using  $<$  or  $>$  and some of these numbers  
e.g.  $7 > 1$



# Greater Than or Less Than

**Control Marker**  
8

1<sup>st</sup> Number


2<sup>nd</sup> Number

3<sup>rd</sup> Number

4<sup>th</sup> Number

**Answer**

Write a number sentence using  $<$  or  $>$  and some of these numbers  
e.g.  $7 > 1$





# Greater Than or Less Than

**Control Marker**  
9

1<sup>st</sup> Number

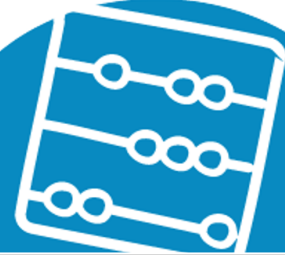
2<sup>nd</sup> Number

3<sup>rd</sup> Number

4<sup>th</sup> Number

**Answer**

Write a number sentence using  $<$  or  $>$  and some of these numbers  
e.g.  $7 > 1$



# Greater Than or Less Than

**Control Marker**  
**10**

1<sup>st</sup> Number


2<sup>nd</sup> Number

3<sup>rd</sup> Number

4<sup>th</sup> Number

**Answer**

Write a number sentence using  $<$  or  $>$  and some of these numbers  
e.g.  $7 > 1$



# Greater Than or Less Than

**Control Marker  
11**

1<sup>st</sup> Number

2<sup>nd</sup> Number

3<sup>rd</sup> Number

4<sup>th</sup> Number

**Answer**

Write a number sentence using  $<$  or  $>$  and some of these numbers  
e.g.  $7 > 1$



# Greater Than or Less Than

**Control Marker**  
**12**

1<sup>st</sup> Number

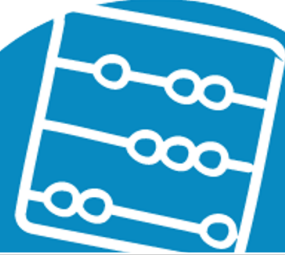
2<sup>nd</sup> Number

3<sup>rd</sup> Number

4<sup>th</sup> Number

**Answer**

Write a number sentence using  $<$  or  $>$  and some of these numbers  
e.g.  $7 > 1$



# Greater Than or Less Than

**Control Marker**  
**13**

1<sup>st</sup> Number

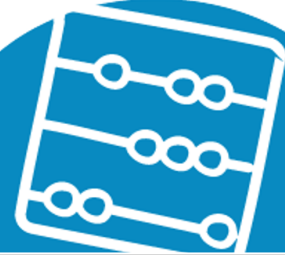
2<sup>nd</sup> Number

3<sup>rd</sup> Number

4<sup>th</sup> Number

**Answer**

Write a number sentence using  $<$  or  $>$  and some of these numbers  
e.g.  $7 > 1$



# Greater Than or Less Than

**Control Marker**  
**14**

1<sup>st</sup> Number

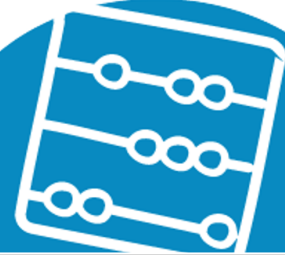
2<sup>nd</sup> Number

3<sup>rd</sup> Number

4<sup>th</sup> Number

**Answer**

Write a number sentence using  $<$  or  $>$  and some of these numbers  
e.g.  $7 > 1$



# Greater Than or Less Than

**Control Marker**  
**15**

1<sup>st</sup> Number

2<sup>nd</sup> Number

3<sup>rd</sup> Number

4<sup>th</sup> Number

Write a number sentence using  $<$  or  $>$  and some of these numbers  
e.g.  $7 > 1$

**Answer**

