

Identify Even Numbers

**Control Marker
1**

1st Number


2nd Number

3rd Number

4th Number

How many even numbers can you make from these numbers?

Answers



Identify Even Numbers

**Control Marker
2**

1st Number

2nd Number

3rd Number

4th Number

How many even numbers can you make from these numbers?

Answers



Identify Even Numbers

Control Marker
3

1st Number


2nd Number

3rd Number

4th Number

How many even numbers can you make from these numbers?

Answers



Identify Even Numbers

Control Marker
4

1st Number


2nd Number

3rd Number

4th Number

How many even numbers can you make from these numbers?

Answers



Identify Even Numbers

Control Marker
5

1st Number


2nd Number

3rd Number

4th Number

How many even numbers can you make from these numbers?

Answers



Identify Even Numbers

Control Marker
6

1st Number


2nd Number

3rd Number

4th Number

How many even numbers can you make from these numbers?

Answers



Identify Even Numbers

Control Marker
7

1st Number

2nd Number

3rd Number

4th Number

How many even numbers can you make from these numbers?

Answers



Identify Even Numbers

Control Marker
8

1st Number

2nd Number

3rd Number

4th Number

How many even numbers can you make from these numbers?

Answers



Identify Even Numbers

Control Marker
9

1st Number

2nd Number

3rd Number

4th Number

How many even numbers can you make from these numbers?

Answers



Identify Even Numbers

Control Marker
10

1st Number


2nd Number

3rd Number

4th Number

How many even numbers can you make from these numbers?

Answers



Identify Even Numbers

Control Marker
11

1st Number


2nd Number

3rd Number

4th Number

How many even numbers can you make from these numbers?

Answers



Identify Even Numbers

Control Marker
12

1st Number

2nd Number

3rd Number

4th Number

How many even numbers can you make from these numbers?

Answers



Identify Even Numbers

Control Marker
13

1st Number

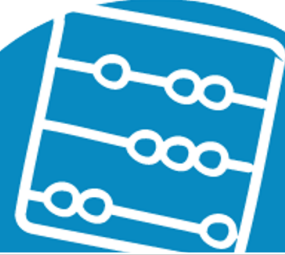
2nd Number

3rd Number

4th Number

How many even numbers can you make from these numbers?

Answers



Identify Even Numbers

Control Marker
14

1st Number

2nd Number

3rd Number

4th Number

How many even numbers can you make from these numbers?

Answers



Identify Even Numbers

Control Marker
15

1st Number

2nd Number

3rd Number

4th Number

How many even numbers can you make from these numbers?

Answers

