

# Subtraction

**Control Marker  
1**

1<sup>st</sup> Number

2<sup>nd</sup> Number

3<sup>rd</sup> Number

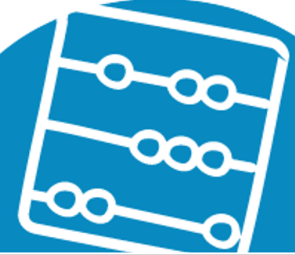
4<sup>th</sup> Number



**Work it out**

-

=



# Subtraction

Control Marker  
2

1<sup>st</sup> Number

2<sup>nd</sup> Number

3<sup>rd</sup> Number

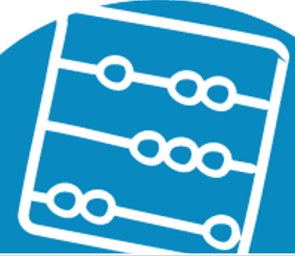
4<sup>th</sup> Number



Work it out

-

=



# Subtraction

Control Marker  
3

1<sup>st</sup> Number

2<sup>nd</sup> Number

3<sup>rd</sup> Number

4<sup>th</sup> Number



Work it out

-

=



# Subtraction

Control Marker  
4

1<sup>st</sup> Number

2<sup>nd</sup> Number

3<sup>rd</sup> Number

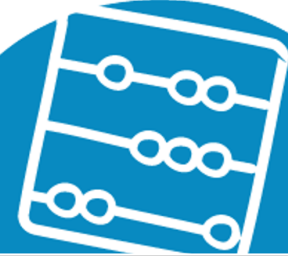
4<sup>th</sup> Number



Work it out

-

=



# Subtraction

Control Marker  
5

1<sup>st</sup> Number

2<sup>nd</sup> Number

3<sup>rd</sup> Number

4<sup>th</sup> Number



Work it out

-

=



# Subtraction

Control Marker  
6

1<sup>st</sup> Number

2<sup>nd</sup> Number

3<sup>rd</sup> Number

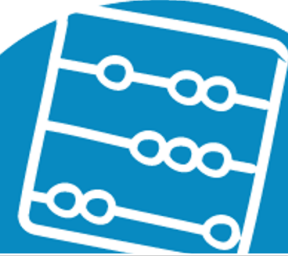
4<sup>th</sup> Number



Work it out

-

=



# Subtraction

Control Marker  
7

1<sup>st</sup> Number

2<sup>nd</sup> Number

3<sup>rd</sup> Number

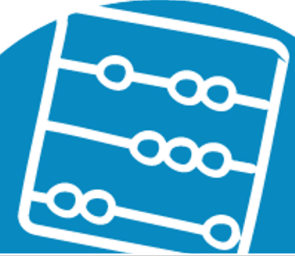
4<sup>th</sup> Number



Work it out

-

=



# Subtraction

Control Marker  
8

1<sup>st</sup> Number

2<sup>nd</sup> Number

3<sup>rd</sup> Number

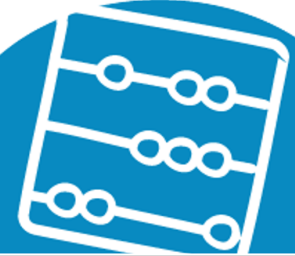
4<sup>th</sup> Number



Work it out

-

=





# Subtraction

Control Marker  
9

1<sup>st</sup> Number

2<sup>nd</sup> Number

3<sup>rd</sup> Number

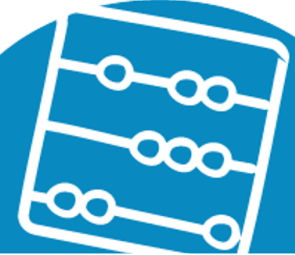
4<sup>th</sup> Number



Work it out

-

=



# Subtraction

**Control Marker**  
**10**

1<sup>st</sup> Number

2<sup>nd</sup> Number

3<sup>rd</sup> Number

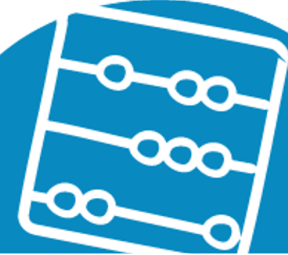
4<sup>th</sup> Number



**Work it out**

-

=



# Subtraction

**Control Marker  
11**

1<sup>st</sup> Number

2<sup>nd</sup> Number

3<sup>rd</sup> Number

4<sup>th</sup> Number



**Work it out**

-

=



# Subtraction

**Control Marker  
12**

1<sup>st</sup> Number

2<sup>nd</sup> Number

3<sup>rd</sup> Number

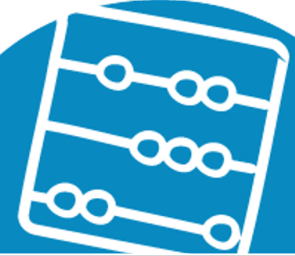
4<sup>th</sup> Number



**Work it out**

-

=



# Subtraction

**Control Marker**  
**13**

1<sup>st</sup> Number

2<sup>nd</sup> Number

3<sup>rd</sup> Number

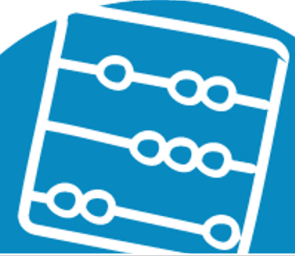
4<sup>th</sup> Number



**Work it out**

-

=



# Subtraction

**Control Marker**  
**14**

1<sup>st</sup> Number

2<sup>nd</sup> Number

3<sup>rd</sup> Number

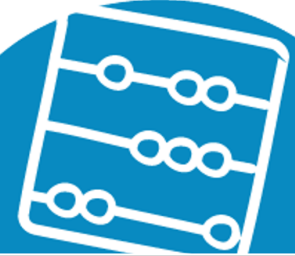
4<sup>th</sup> Number



**Work it out**

-

=



# Subtraction

**Control Marker**  
**15**

1<sup>st</sup> Number

2<sup>nd</sup> Number

3<sup>rd</sup> Number

4<sup>th</sup> Number



**Work it out**

-

=

