



Adding and Subtracting 17

**Control
Marker
1**




3rd Number




4th Number

=



+



Add 17 to the
number

-



Subtract 17 from
the number




Work it out




Adding and Subtracting 17

**Control
Marker
2**




3rd Number




4th Number

=



+



Add 17 to the
number


-



Subtract 17 from
the number




Work it out




Adding and Subtracting 17

**Control
Marker**
3



3rd Number




4th Number

=



+



Add 17 to the
number

-



Subtract 17 from
the number




Work it out




Adding and Subtracting 17

**Control
Marker**
4




3rd Number




4th Number

=



+



Add 17 to the
number


-



Subtract 17 from
the number




Work it out




Adding and Subtracting 17

**Control
Marker**
5



3rd Number




4th Number

=



+



Add 17 to the
number

-



Subtract 17 from
the number




Work it out




Adding and Subtracting 17

**Control
Marker**
6




3rd Number




4th Number

=



+



Add 17 to the
number

-



Subtract 17 from
the number




Work it out




Adding and Subtracting 17

**Control
Marker
7**



3rd Number




4th Number

=



+



Add 17 to the
number

-



Subtract 17 from
the number




Work it out




Adding and Subtracting 17

**Control
Marker**
8




3rd Number




4th Number

=



+



Add 17 to the
number

-



Subtract 17 from
the number



Work it out



Adding and Subtracting 17

**Control
Marker**
9

1st Number

2nd Number

=

+

Add 17 to the
number

-

Subtract 17 from
the number




Work it out




Adding and Subtracting 17

**Control
Marker
10**



3rd Number




4th Number

=



+



Add 17 to the
number


-



Subtract 17 from
the number




Work it out




Adding and Subtracting 17

**Control
Marker
11**




3rd Number




4th Number

=



+



Add 17 to the
number

-



Subtract 17 from
the number




Work it out




Adding and Subtracting 17

**Control
Marker
12**




3rd Number




4th Number

=



+



Add 17 to the
number


-



Subtract 17 from
the number




Work it out




Adding and Subtracting 17

**Control
Marker**
13




3rd Number




4th Number

=



+



Add 17 to the
number

-



Subtract 17 from
the number




Work it out




Adding and Subtracting 17

**Control
Marker
14**



3rd Number




4th Number

=



+



Add 17 to the
number


-



Subtract 17 from
the number




Work it out




Adding and Subtracting 17

**Control
Marker
15**



3rd Number




4th Number

=



+



Add 17 to the
number

-



Subtract 17 from
the number



Work it out

