



Adding and Subtracting 19

**Control
Marker
1**



3rd Number



4th Number

=



+



Add 19 to the
number

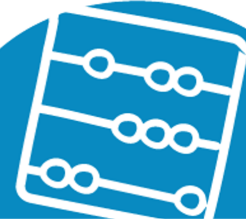
-



Subtract 19 from
the number




Work it out




Adding and Subtracting 19

**Control
Marker
2**



3rd Number




4th Number

=



+



Add 19 to the
number

-



Subtract 19 from
the number




Work it out




Adding and Subtracting 19

**Control
Marker**
3




3rd Number




4th Number

=



+



Add 19 to the
number


-



Subtract 19 from
the number




Work it out




Adding and Subtracting 19

**Control
Marker**
4




3rd Number




4th Number

=



+



Add 19 to the
number


-



Subtract 19 from
the number




Work it out




Adding and Subtracting 19

**Control
Marker**
5



3rd Number




4th Number

=



+



Add 19 to the
number


-



Subtract 19 from
the number




Work it out




Adding and Subtracting 19

**Control
Marker**
6



3rd Number




4th Number

=



+



Add 19 to the
number


-



Subtract 19 from
the number




Work it out




Adding and Subtracting 19

**Control
Marker
7**



3rd Number




4th Number

=



+



Add 19 to the
number

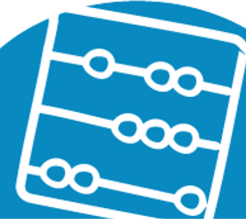
-



Subtract 19 from
the number




Work it out




Adding and Subtracting 19

**Control
Marker**
8



3rd Number




4th Number

=



+



Add 19 to the
number

-



Subtract 19 from
the number




Work it out




Adding and Subtracting 19

**Control
Marker**
9



1st Number




2nd Number

=



+



Add 19 to the
number

-



Subtract 19 from
the number




Work it out




Adding and Subtracting 19

**Control
Marker
10**



3rd Number



4th Number

=



+



Add 19 to the
number

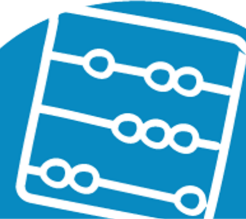
-



Subtract 19 from
the number




Work it out




Adding and Subtracting 19

**Control
Marker
11**




3rd Number




4th Number

=



+



Add 19 to the
number

-



Subtract 19 from
the number




Work it out




Adding and Subtracting 19

**Control
Marker
12**



3rd Number




4th Number

=



+



Add 19 to the
number


-



Subtract 19 from
the number




Work it out




Adding and Subtracting 19

**Control
Marker**
13



3rd Number




4th Number

=



+



Add 19 to the
number

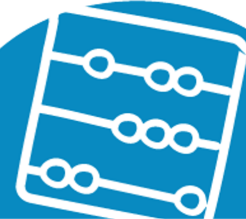
-



Subtract 19 from
the number




Work it out




Adding and Subtracting 19

**Control
Marker**
14



3rd Number




4th Number

=



+



Add 19 to the
number


-



Subtract 19 from
the number




Work it out




Adding and Subtracting 19

**Control
Marker**
15



3rd Number




4th Number

=



+



Add 19 to the
number

-



Subtract 19 from
the number



Work it out

