

# Time

Control Marker 1

1<sup>st</sup> Number

2<sup>nd</sup> Number


:

3<sup>rd</sup> Number

4<sup>th</sup> Number


If this was the time on a 24 hour clock, what would the time be on a 12 hour clock?

Answer




# Time

## Control Marker 2

  
1<sup>st</sup> Number      2<sup>nd</sup> Number      3<sup>rd</sup> Number

If it was this time in the evening, what would the time be on a 24 hour clock?

Answer



# Time


## Control Marker 3

Using the numbers on the marker, can you make a time for a 24 hour clock?

:  :


Now can you convert it to a time for a 12 hour clock?

Answer



# Time

**Control Marker 4**




2<sup>nd</sup> Number

3<sup>rd</sup> Number

4<sup>th</sup> Number


If it was this time in the evening, what would the time be on a 24 hour clock?

**Answer**



# Time

## Control Marker 5




1<sup>st</sup> Number

2<sup>nd</sup> Number

3<sup>rd</sup> Number

If it was this time in the afternoon, what would the time be on a 24 hour clock?

Answer



# Time


## Control Marker 6

:

2<sup>nd</sup> Number      3<sup>rd</sup> Number      4<sup>th</sup> Number

If it was this time in the afternoon, what would the time be on a 24 hour clock?

Answer



# Time

## Control Marker 7

Using the numbers on the marker, can you make a time for a 24 hour clock?

:  :

Now can you convert it to a time for a 12 hour clock?

Answer



# Time

## Control Marker 8

Using the numbers on the marker, can you make a time for a 24 hour clock?

:  :

Now can you convert it to a time for a 12 hour clock?

Answer





# Time


## Control Marker 9

:

2<sup>nd</sup> Number      3<sup>rd</sup> Number      4<sup>th</sup> Number


If it was this time in the afternoon, what would the time be on a 24 hour clock?

Answer



# Time

Control Marker 10



2<sup>nd</sup> Number

3<sup>rd</sup> Number

4<sup>th</sup> Number

If it was this time in the afternoon, what would the time be on a 24 hour clock?

Answer



# Time

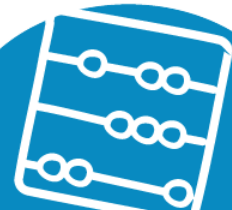
## Control Marker 11

:

2<sup>nd</sup> Number      3<sup>rd</sup> Number      4<sup>th</sup> Number

If it was this time in the afternoon, what would the time be on a 24 hour clock?

Answer



# Time

Control Marker 12

:

2<sup>nd</sup> Number      3<sup>rd</sup> Number      4<sup>th</sup> Number

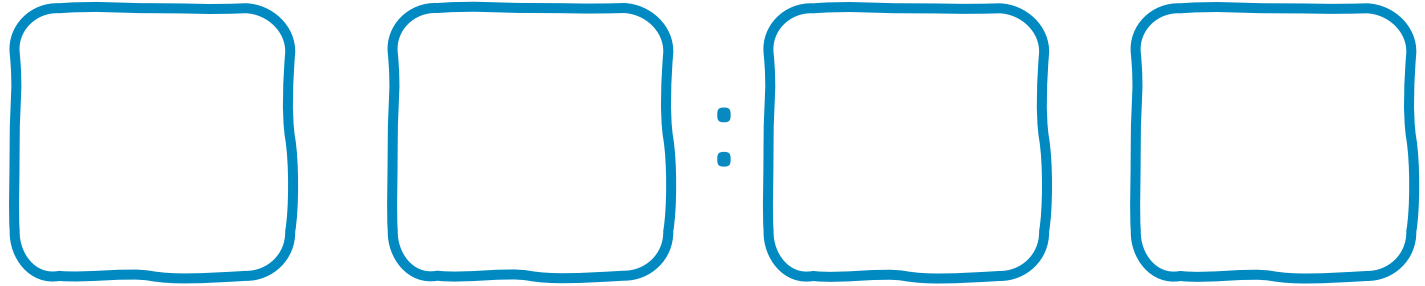
If it was this time in the afternoon, what would the time be on a 24 hour clock?

Answer



# Time

## Control Marker 13



1<sup>st</sup> Number

2<sup>nd</sup> Number

3<sup>rd</sup> Number

4<sup>th</sup> Number

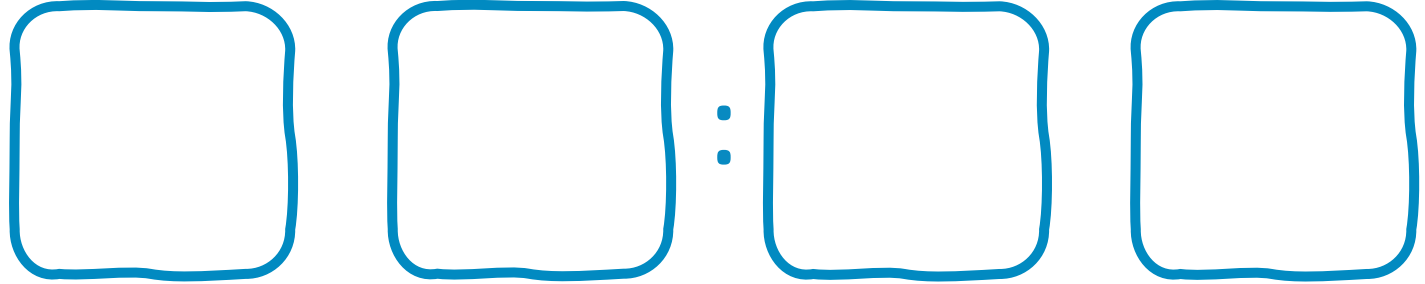
If this was the time on a 24 hour clock, would it be morning or afternoon?

Answer



# Time

Control Marker 14



Four empty rounded square boxes arranged horizontally, separated by a colon (:). The boxes are intended for entering the digits of a time.

1<sup>st</sup> Number

2<sup>nd</sup> Number

3<sup>rd</sup> Number

4<sup>th</sup> Number


If this was the time in the morning, what would the time be on a 24 hour clock?

Answer



# Time

Control Marker 15



2<sup>nd</sup> Number

3<sup>rd</sup> Number

4<sup>th</sup> Number

If it was this time in the afternoon, what would the time be on a 24 hour clock?

Answer

